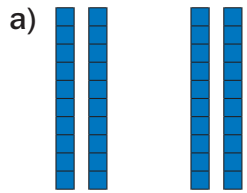


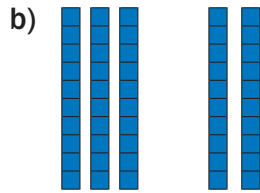
Evaluación diagnóstica

Nombre: _____ Paralelo: _____ Fecha: _____

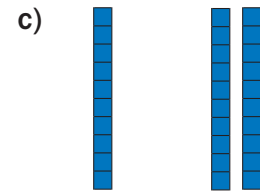
1. **Observa** el material base diez y luego, **suma**.



$$\begin{array}{l} 2 \text{ D} + 2 \text{ D} = 4 \text{ D} \\ 20 + 20 = 40 \end{array}$$

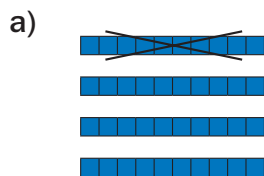


$$\begin{array}{l} 3 \text{ D} + 2 \text{ D} = 5 \text{ D} \\ 30 + 20 = 50 \end{array}$$

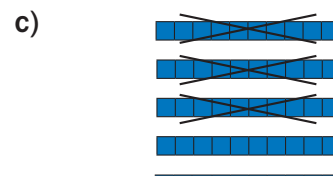


$$\begin{array}{l} 1 \text{ D} + 2 \text{ D} = 3 \text{ D} \\ 10 + 20 = 30 \end{array}$$

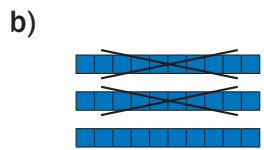
2. **Observa** el material base diez, y **resuelve** las sustracciones.



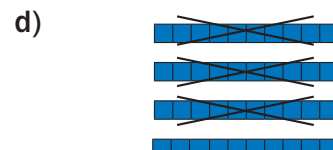
$$\begin{array}{l} 4 \text{ D} - 1 \text{ D} = 3 \text{ D} \\ 40 - 10 = 30 \end{array}$$



$$\begin{array}{l} 5 \text{ D} - 3 \text{ D} = 2 \text{ D} \\ 50 - 30 = 20 \end{array}$$



$$\begin{array}{l} 3 \text{ D} - 2 \text{ D} = 1 \text{ D} \\ 30 - 20 = 10 \end{array}$$



$$\begin{array}{l} 4 \text{ D} - 3 \text{ D} = 1 \text{ D} \\ 40 - 30 = 10 \end{array}$$

3. **Resuelve** de izquierda a derecha.

