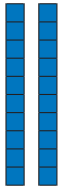
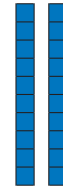
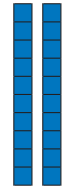
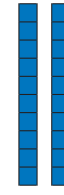




Evaluación diagnóstica

Nombre: _____ Paralelo: _____ Fecha: _____

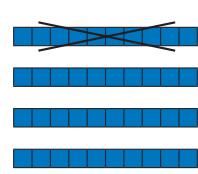
1. **Observa** el material base diez y luego, **suma**.

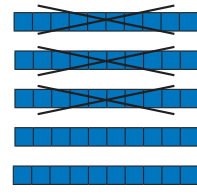
a)  +  =
 $2\text{ D} + 2\text{ D} = \square$
 $20 + 20 = \square$

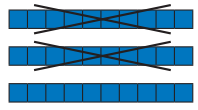
b)  +  =
 $\text{D} + \text{D} = \square$
 + =

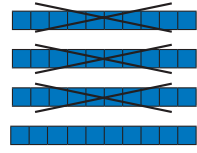
c)  +  =
 $\text{D} + \text{D} = \square$
 + =

2. **Observa** el material base diez, y **resuelve** las sustracciones.

a) 
 $4\text{ D} - 1\text{ D} = \square$
 $40 - 10 = \square$

c) 
 $\text{D} - \text{D} = \square$
 - =

b) 
 $\text{D} - \text{D} = \square$
 - =

d) 
 $\text{D} - \text{D} = \square$
 - =

3. **Resuelve** de izquierda a derecha.

$14 + 10 - 12$
 -

$20 - 5 + 3$
 +