








Taller de matemática

Nombre: _____ Paralelo: _____ Fecha: _____

1. Indica cuánto valen las figuras.

$\begin{array}{r} 254 \text{ (6)} \\ + 3 \text{ (4)} 8 \\ \hline 58034 \end{array}$	$\begin{array}{r} 68 \text{ (4)} 7 \\ - 2495 \text{ (2)} \\ \hline \text{ (3)} 596 \end{array}$
$\begin{array}{r} 6245 \text{ (2)} \\ + \text{ (2)} 498 \\ \hline 94 \text{ (4)} 49 \end{array}$	$\begin{array}{r} 82 \text{ (7)} 4 \\ - \text{ (5)} 641 \\ \hline 572 \text{ (3)} \end{array}$
$\begin{array}{r} 62487 \\ + \text{ (5)} 87 \text{ (2)} \\ \hline 78 \text{ (6)} 61 \end{array}$	$\begin{array}{r} 94512 \\ - 5 \text{ (2)} 18 \\ \hline 40 \text{ (4)} \end{array}$

 = 1
 = _____
 = _____
 = _____
 = _____
 = _____
 = _____

2. ¿Qué número falta? Completa.

$$\begin{array}{r} \square \\ + 561 \\ \hline 809 \end{array}$$

$$\begin{array}{r} 6521 \\ + \square \\ \hline 9675 \end{array}$$

$$\begin{array}{r} \square \\ + 61872 \\ \hline 90337 \end{array}$$

$$\begin{array}{r} \square \\ + 764 \\ \hline 1009 \end{array}$$

$$\begin{array}{r} \square \\ - 328 \\ \hline 214 \end{array}$$

$$\begin{array}{r} \square \\ - 1245 \\ \hline 2000 \end{array}$$

$$\begin{array}{r} \square \\ - 23784 \\ \hline 30345 \end{array}$$

$$\begin{array}{r} \square \\ - 31425 \\ \hline 57253 \end{array}$$

$$\begin{array}{r} \square \\ - 51248 \\ \hline 77795 \end{array}$$

