








Taller de matemática

Nombre: _____ Paralelo: _____ Fecha: _____

1. Indica cuánto valen las figuras.

$\begin{array}{r} 254 \text{ (6)} \\ + 3 \text{ (4)} 48 \\ \hline 58034 \end{array}$	$\begin{array}{r} 68 \text{ (4)} 7 \\ - 2495 \text{ (2)} \\ \hline \text{ (3)} 3596 \end{array}$
$\begin{array}{r} 6245 \text{ (2)} \\ + \text{ (2)} 2498 \\ \hline 94 \text{ (4)} 49 \end{array}$	$\begin{array}{r} 82 \text{ (7)} 4 \\ - \text{ (5)} 5641 \\ \hline 572 \text{ (3)} \end{array}$
$\begin{array}{r} 62487 \\ + \text{ (2)} 587 \text{ (4)} \\ \hline 78 \text{ (6)} 61 \end{array}$	$\begin{array}{r} 94512 \\ - 5 \text{ (2)} 18 \\ \hline 40 \text{ (4)} \end{array}$

	=	<u>1</u>
	=	<u>2</u>
	=	<u>3</u>
	=	<u>4</u>
	=	<u>5</u>
	=	<u>8</u>
	=	<u>9</u>

2. ¿Qué número falta? Completa.

$$\begin{array}{r} + \boxed{248} \\ 561 \\ \hline 809 \end{array}$$

$$\begin{array}{r} + 6521 \\ + \boxed{3154} \\ \hline 9675 \end{array}$$

$$\begin{array}{r} + \boxed{28465} \\ 61872 \\ \hline 90337 \end{array}$$

$$\begin{array}{r} + \boxed{245} \\ 764 \\ \hline 1009 \end{array}$$

$$\begin{array}{r} - \boxed{542} \\ 328 \\ \hline 214 \end{array}$$

$$\begin{array}{r} - \boxed{3245} \\ 1245 \\ \hline 2000 \end{array}$$

$$\begin{array}{r} - \boxed{54129} \\ 23784 \\ \hline 30345 \end{array}$$

$$\begin{array}{r} - \boxed{88678} \\ 31425 \\ \hline 57253 \end{array}$$

$$\begin{array}{r} - \boxed{129043} \\ 51248 \\ \hline 77795 \end{array}$$

